

I. Počítáme do pěti

1	2		4
---	---	--	---

0		2	3
---	--	---	---

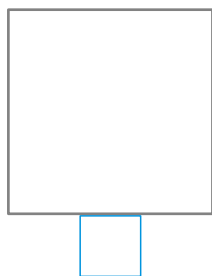

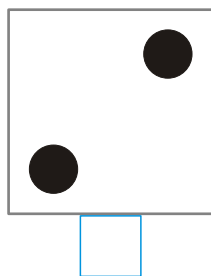
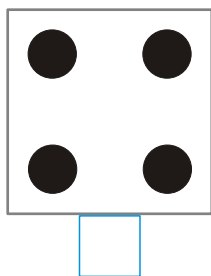

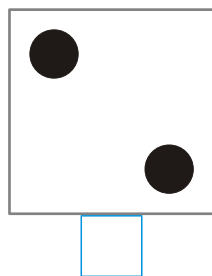
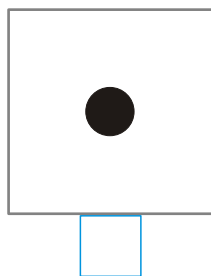
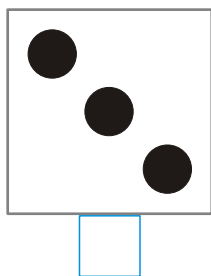
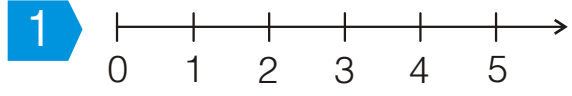
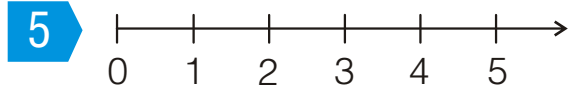
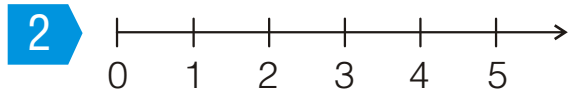
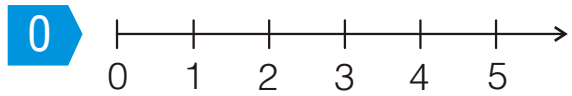
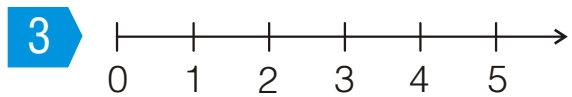
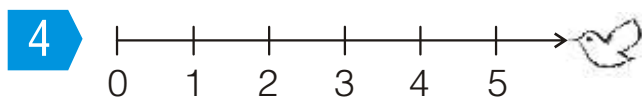
5	4		2
---	---	--	---

4		2	1
---	--	---	---

0			3
---	--	--	---

2			5
---	--	--	---

3			0
---	--	--	---



[M 1/2, str. 3–6] Procvičujeme a aplikujeme

[1] Doplněte v každém řádku chybějící čísla v číselné řadě. Vyznačte daná čísla na číselné ose. [2] Zapišujte počet teček.