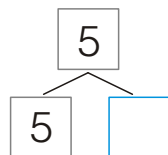
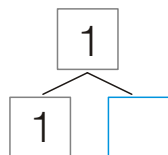
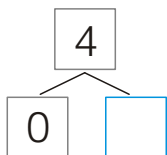
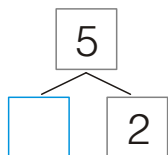
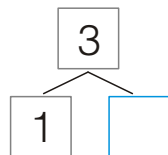
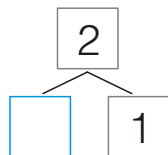
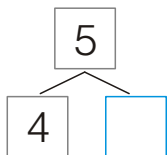
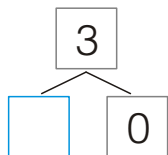
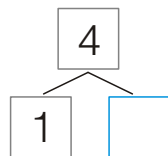
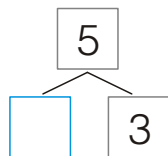
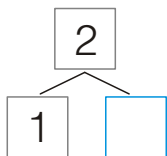
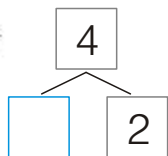


I. Počítáme do pěti



$2 + 0 = \underline{\quad}$

$3 + 2 = \underline{\quad}$

$1 + 2 = \underline{\quad}$

$3 - 1 = \underline{\quad}$

$5 - 1 = \underline{\quad}$

$5 - 0 = \underline{\quad}$

$4 - 2 = \underline{\quad}$

$2 + 1 = \underline{\quad}$

$4 + 1 = \underline{\quad}$

$5 - 2 = \underline{\quad}$

$3 - 0 = \underline{\quad}$

$3 - 3 = \underline{\quad}$

$1 + 1 = \underline{\quad}$

$1 + 0 = \underline{\quad}$

$0 + 3 = \underline{\quad}$

$0 + 4 = \underline{\quad}$

$3 - 2 = \underline{\quad}$

$1 - 1 = \underline{\quad}$

$2 - 1 = \underline{\quad}$

$3 + 1 = \underline{\quad}$

$2 + 2 = \underline{\quad}$

$5 - 5 = \underline{\quad}$

$5 - 4 = \underline{\quad}$

$5 - 3 = \underline{\quad}$

$4 - 3 = \underline{\quad}$

$2 - 2 = \underline{\quad}$

$1 + 3 = \underline{\quad}$

$2 + 3 = \underline{\quad}$

$1 + 4 = \underline{\quad}$

$4 - 1 = \underline{\quad}$

[M 1/2, str. 7-13] Opakujeme

[1] Doplňte rozklad všech daných čísel. [2] Počítejte příklady a zapisujte výsledky.